

Little Rose Academy

model town, digiana, jammu

**Summer Vacation
Assignment**

Class - IV

Session : 2025-2026

Class - IV

Subject - Mathematics

Worksheet – Multiple Choice Questions

1. Find the missing numbers in the table of 17 given here.

17	34	51	68	?	102	119	136	?	170
----	----	----	----	---	-----	-----	-----	---	-----

- a. 85, 153 b. 85, 143 c. 75, 153 d. 75, 143

2. If a small pack of plasticine costs ₹ 13, then what is the cost of 37 such packs?

- a. ₹ 471 b. ₹ 391 c. ₹ 581 d. ₹ 481

3. What is half of 9×16 ?

- a. 36 b. 72 c. 94 d. 144

4. While planting rice, a farmer makes 54 rows of 23 plants. How many rice plants are planted in one farm?

- a. 270 b. 1142 c. 1242 d. 1042

5. Find 2147×0 .

- a. 2147 b. 21407 c. 0 d. 21470

6. Find

$$\begin{array}{r} 7 \ 3 \\ \times 1 \ 4 \\ \hline \end{array}$$

- a. 982 b. 1022 c. 1012 d. 922

7. Find the missing numbers in the table of 18 given here.

18	36	54	?	90	108	126	?	162	180
----	----	----	---	----	-----	-----	---	-----	-----

- a. 62, 144 b. 72, 144 c. 72, 154 d. 62, 154

8. Find

$$\begin{array}{r} 104 \\ \times 15 \\ \hline \end{array}$$

- a. 1560 b. 210 c. 15060 d. 1160

9. Find

$$\begin{array}{r} 247 \\ \times 31 \\ \hline \end{array}$$

- a. 7657 b. 7457 c. 988 d. 6657

10. Find

$$\begin{array}{r} 3276 \\ \times 50 \\ \hline \end{array}$$

- a. 153800 b. 163500 c. 16380 d. 163800

11. In a warehouse, 137 bicycles are kept in each of the 43 rows. How many bicycles are there in the warehouse?

- a. 959 b. 5871 c. 5891 d. 5981

12. A shelf has 77 Mathematics books. If each book has 219 pages, then how many pages are there in those books?

- a. 3066 b. 16863 c. 16203 d. 16563

13. Find the missing numbers in the table of 19 given here.

19	38	57	76	95	?	?	152	171	190
----	----	----	----	----	---	---	-----	-----	-----

- a. 104, 123 b. 104, 133 c. 114, 133 d. 114, 123

14. If 921 people donated ₹ 700 each to a flood relief fund, then how much money did they donate altogether?

- a. ₹ 644700 b. ₹ 64700 c. ₹ 64470 d. ₹ 637000

15. $\begin{array}{r} 257 \\ \times 144 \\ \hline \end{array}$ Find

- a. 36008 b. 37908 c. 36908 d. 37008

16. Find $\begin{array}{r} 85 \\ \times 85 \\ \hline \end{array}$

- a. 1105 b. 6225 c. 6425 d. 7225

17. Find 88×600 .

- a. 528 b. 52800 c. 5280 d. 48800

18. If 325 people ate daily in a *gurudwara*, then how many people ate in the month of January?

- a. 9750 b. 1300 c. 10075 d. 9975

19. If 2176 tickets are issued every day from a counter, then how many tickets are issued from 32 such counters?

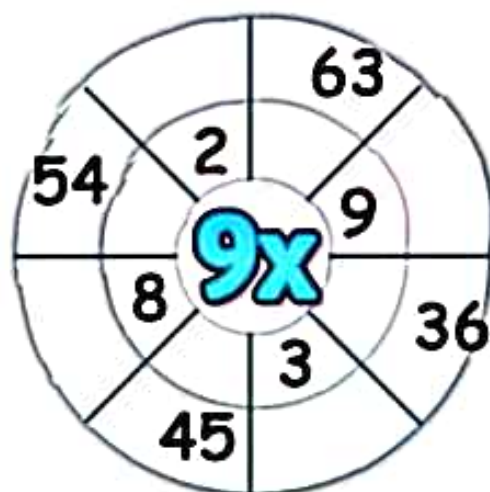
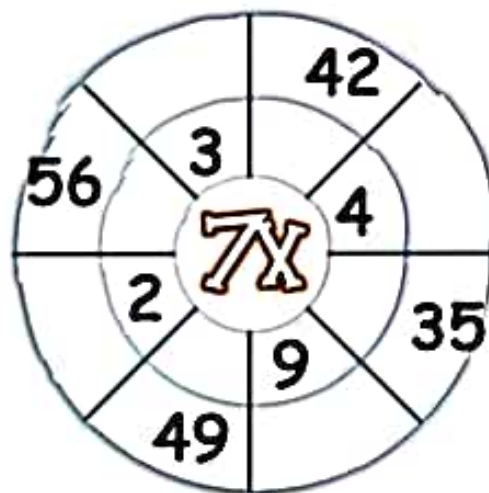
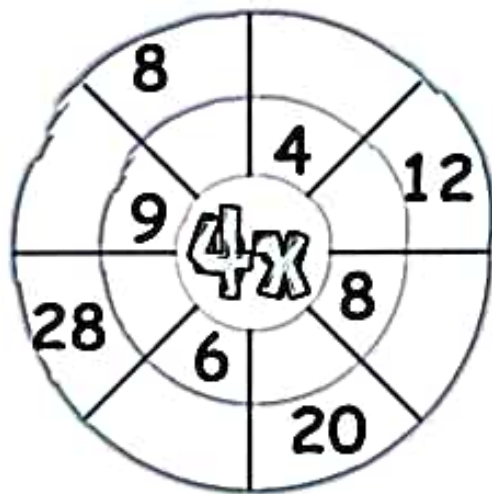
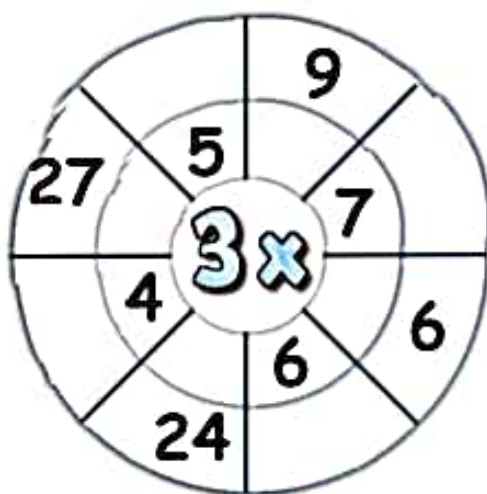
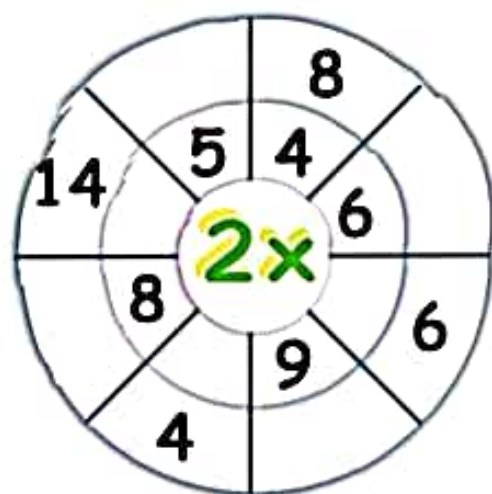
- a. 69632 b. 10880 c. 69532 d. 70632

20. Find $\begin{array}{r} 2319 \\ \times 160 \\ \hline \end{array}$

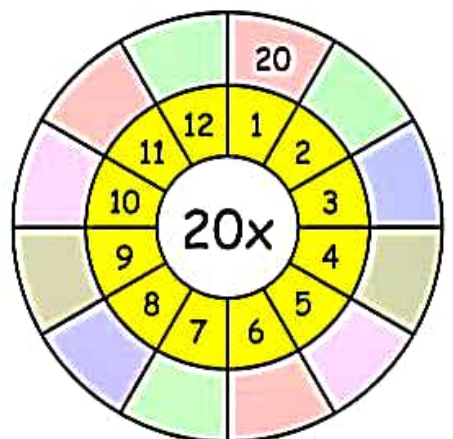
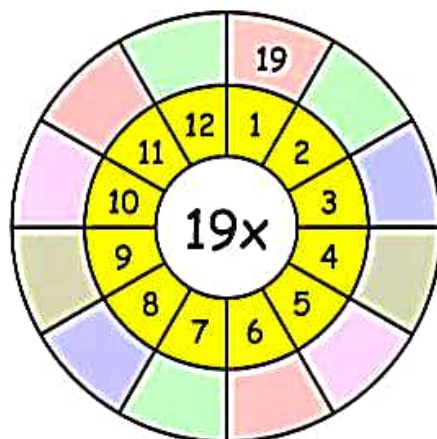
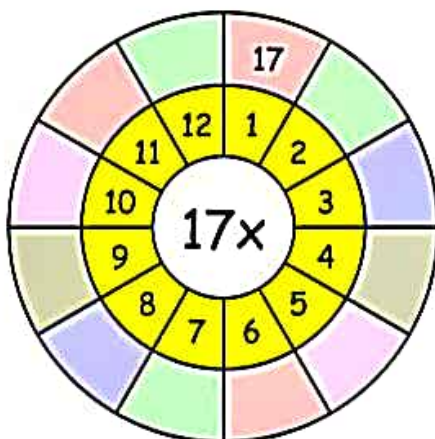
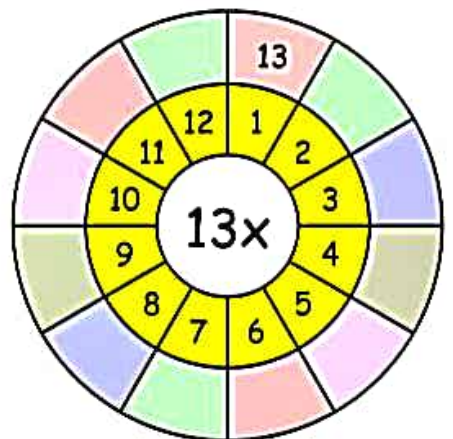
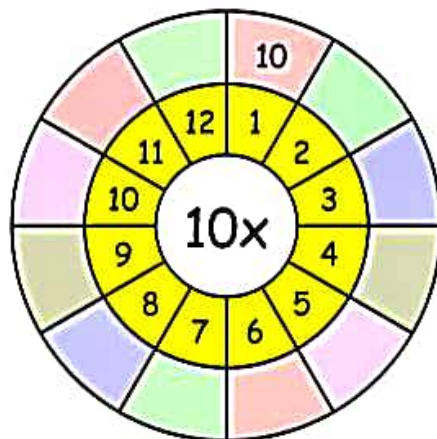
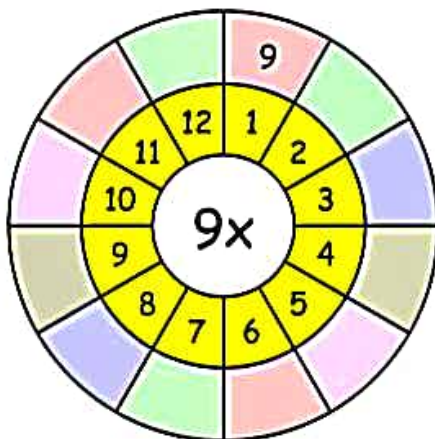
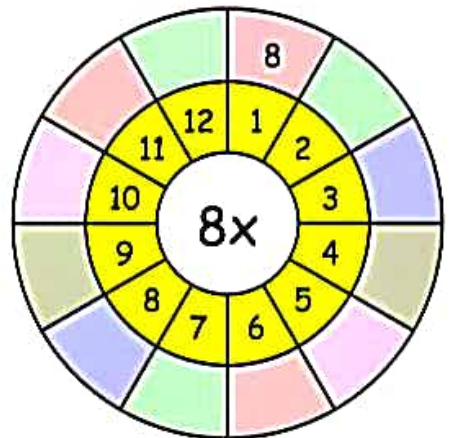
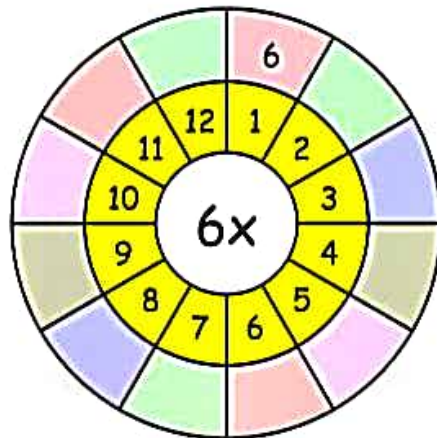
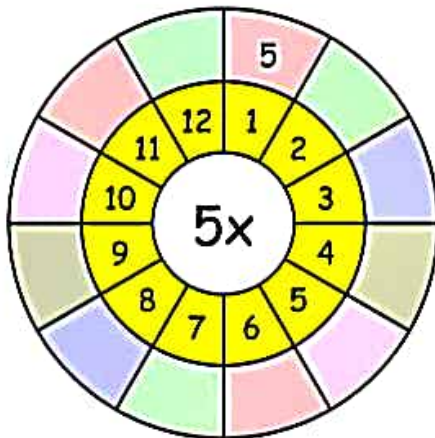
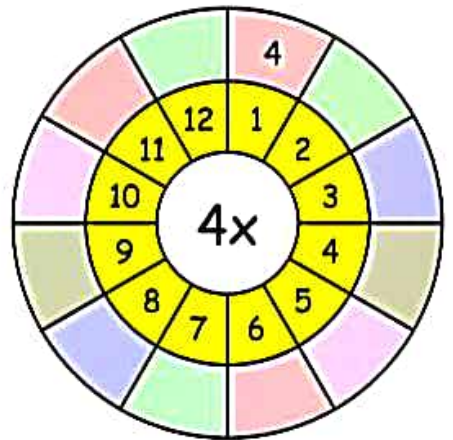
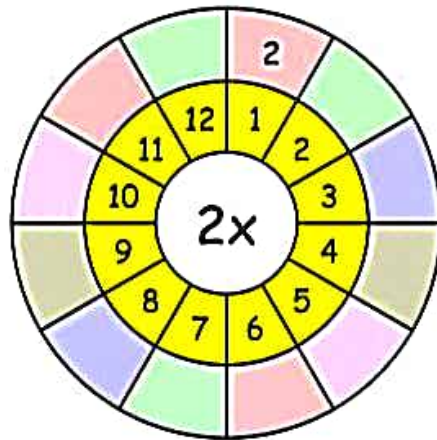
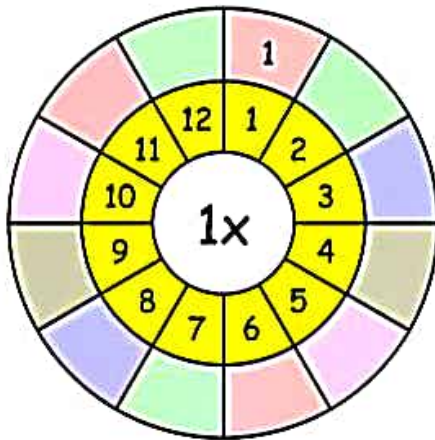
- a. 37104 b. 371040 c. 370040 d. 37004

MULTIPLICATION WHEEL

Complete the multiplication wheels!



Multiplication Wheels



Word Problems on Addition and Subtraction

1. There are 9000 students in a school. If the number of boys are 6325. Find out the number of girls.
2. Mr. Bhanu ordered 7332 cups of ice-cream for his party. At the end of the party 3588 cups were left. How many cups of ice-cream did the guests have?
3. A farmer had 2250 sheep. He sold 1154 sheep. How many sheep are left with him?
4. Vibhu ran 2145 metres while Shyam ran 1766 meters. How many meters more did Vibhu run comparatively?

Subtraction-Horizontal

Name: _____ Date: ____/____/____ Score: _____

Solve the worksheet and colour the picture.

$493 - 453 =$

$394 - 103 =$

$177 - 145 =$

$253 - 136 =$

$175 - 106 =$

$255 - 226 =$

$486 - 157 =$

$406 - 250 =$

$303 - 260 =$

$309 - 227 =$


$463 - 303 =$

$357 - 252 =$

$484 - 173 =$

$498 - 223 =$

$392 - 303 =$



कक्षा - चौथी

विषय - हिन्दी

संज्ञा

नीचे लिखे वाक्यों में संज्ञा शब्द भरिए:-

वातावरण	मानवता	विद्यालय	हिमालय	धर्म
सौंदर्य	हरियाली	जीवन	गुरु	वचन

1. गंगा _____ से निकलती है।
2. मानव सेवा ही सच्चा _____ है।
3. हमारा _____ दूषित हो रहा है।
4. _____ विद्या का मंदिर होता है।
5. मनुष्यों में _____ का होना बहुत जरूरी है।
6. _____ हर गम से बेगाना होता है।
7. पानी ही _____ है।
8. प्रकृति सबसे बड़ी _____ है।
9. चारों ओर _____ छाई हुई है।
10. कवि ने प्रकृति के _____ का रोचक अनुभव किया है।

प्र १ संज्ञा शब्द चुनो - (CHOOSE THE CORRECT OPTION)

- १ यह एक बगीचा है ।
- २ फल टोकरी में हैं ।
- ३ महालक्ष्मी दिल्ली में रहती है ।
- ४ चिड़िया उड़ रही है ।

प्र २ खाली स्थान पर संज्ञा शब्द भरों - (DRAG AND DROP)

कौआ सेब आगरा फूल जनवरी

१. मुझे ----- पसंद है ।
२. पेड़ पर ----- बैठा है ।
३. ----- में बहुत ठंड थी ।
४. ताजमहल ----- में है ।

प्र ३ दिए गए अनेक शब्दों के लिए एक शब्द छाँटो - (DRAG AND DROP)

किसान मोची जादूगर सत्यवादी

- जो जूते बनाता हो-----
- जो अनाज उगाता हो-----
- जो सदा सच बोले -----
- जो जादू दिखता है-----

प्र ४ जोड़े बनाओ - MATCH

- | | |
|-----------------------------|-----------|
| जो कविता लिखता हो | लुहार |
| जो लोहे का काम करता है | साप्ताहिक |
| सप्ताह में एक बार होने वाला | मांसाहारी |
| जो मांस खाता हो | कवि |

अशुद्ध वाक्य

निम्नलिखित अशुद्ध वाक्यों को शुद्ध करके लिखिए ।

Correct and rewrite the sentences.

1. मुझको पुस्तक पढनी है ।

.....

2. मेरे को अभी जाना है ।

.....

3. छोड़े तेज़ दौड़ता है ।

.....

4. उपवन में अनेकों पृथ हैं ।

.....

5. कृपया करके इधर बैठिए ।

.....

6. यहाँ बड़ा अंधेरा है ।

.....

7. हम खेलता है ।

.....

8. बहुत से लड़का खेल रहे हैं ।

.....

9. लड़के क्या देखता है ?

.....

10. कौर कौ-कौ करता है ।

.....

अशुद्धि संशोधन

CORRECTION OF ERRORS



I. सही शब्द पर धेरा लगाओ -

1. परिक्षा, परीक्षा, परीकशा
2. विशाल, विसाल, वीशाल
3. गूरू, गुरू, गरु
4. दुशमन, दुश्मन, दशमान
5. दूध, दुध, दुद्ध
6. सुर्य, सूर्य, सूर्या

पर्यायवाची शब्द

1. मेघ

2. मृत्यु

3. राजा

4. रात्रि

5. लक्ष्मी

6. संसार

7. सरस्वती

8. सवेरा

9. साँप

10. सिंह

Read the passage and choose the correct answer.

हर देश का अपना एक राष्ट्रीय झंडा होता है। वह उस देश का प्रतीक होता है। हमारे देश का राष्ट्रीय झंडा 'तिरंगा' है। इसमें मुख्य तीन रंग हैं- केसरिया, सफेद और हरा। सबसे ऊपर केसरिया रंग की पट्टी है, बीच में सफेद रंग की पट्टी है और हरे रंग की पट्टी सबसे नीचे है। केसरिया रंग बलिदान का प्रतीक है। सफेद रंग सच्चाई और शांति का प्रतीक है तथा हरा खुशहाली का प्रतीक है। हरा रंग हमारे देश की सुख-समृद्धि को भी दर्शाता है। हमारे देश का तिरंगा हमारी शान का प्रतीक है। झंडे के बीचों-बीच एक चक्र है, जिसे 'अशोक चक्र' कहते हैं।

प्रश्न 1 राष्ट्रीय झंडा तिरंगा किस देश का है ?

उत्तर

प्रश्न 2 तिरंगे में कौन-कौन से रंग हैं ?

उत्तर

प्रश्न 3 सफेद रंग किसका प्रतीक है ?

उत्तर

प्रश्न 4 अशोक चक्र किस रंग की पट्टी पर होता है ?

उत्तर

प्रश्न 5 इस गद्यांश के लिए उपयुक्त शीर्षक हो सकता है-

उत्तर



Directions: Fill the blanks with the correct answer.


Winter boots, Rain jackets, Gumboots, Sandals, Towel, Mittens, Earmuffs, Gloves

- 1) During spring we wear _____ to keep our feet cool and comfortable.
- 2) My favorite winter accessory is _____ to keep my hands warm.
- 3) I love to jump in puddles wearing my _____.
- 4) My favorite winter shoes are _____ because they have a good grip on icy surfaces.
- 5) I like to wear a _____ to keep my ears warm.
- 6) When I go to the pool, I carry a _____ to dry off after swimming.
- 7) I like to wear _____ to keep my hands warm while building a snowman.
- 8) We wear _____ to keep our shirts dry in the rainy season.

Q1. Fill in the blanks:

1. We wear clothes to _____ ourselves from rain, heat, cold and dust.
2. Clothes make us look _____ and _____.
3. We wear _____ clothes in Summer season.
4. _____ are made in factories by machines. 2/3
5. Woollen clothes keep us _____.

Q2. Write three examples of natural fibres and man-made fibres on the t-shirts.



1. Fill in the blanks with the given words:-

(warm, protect, cotton, raincoat, gumboots)



1. Clothes _____ us from heat, cold and rain.

2. We wear _____ clothes in summer.

3. Woollen clothes keep us _____.

4. We use a _____ and _____ when it rains.



II. Write "true" or "false"

1. Cotton clothes keep us cool. (_____)

2. We wear woollen clothes during rainy season. (_____)

3. We wear different clothes at different times of the year.
(_____)



III. Identify the clothes and name the seasons.



project work:

Draw or paste pictures of
different types of clothes

Class - IV

Subject - English

Jumbled Words

The letters of the below words are jumbled. Find out what the word is and write it on the space provided.

1. eadl _____

11. aycrz _____

2. ikck _____

12. htaed _____

3. esom _____

13. porgu _____

4. apyl _____

14. trtuh _____

5. rwok _____

15. rdmiare _____

6. ceaph _____

16. oynymns _____

7. tlfoa _____

17. htous _____

8. hspar _____

18. bluid _____

9. igtanh _____

19. mared _____

Write a sentence using each word shown below:

1. juice

2. games

3. running

4. chairs

Common & Proper Noun Sort

Look at the words below. Decide if they are a common or proper noun. Glue in the correct column. If it is a proper noun, **HIGHLIGHT** the letter or letters that should be capitalized.

Common Nouns		Proper Nouns Don't forget to highlight the letter(s)	
street	glasses	halloween	month
mountain	dr. seuss	albert einstein	planet
saturn	holiday	florida	kitten
monday	sarah	thanksgiving	disneyland
february	dog	car	sister
kate	doll	tacobell	barbie

Person	Place	Thing

girl	dad	mall
book	shoes	mother
school	store	dog

Suffixes

Directions: Add the suffixes -ed and -ing to each root word.

root word	-ed	-ing
play		
look		
join		
count		
spell		
talk		

Choose the correct answer from the following options.

1. Computer is an _____ device.

- i. Electro ii. Electronic iii. Electrical iv. Electricity

2. A machine that consume less amount of energy is called _____ device.

- i. Electronic ii. Electrical iii. Both (i)&(ii) iv. None of these

3. Unorganised facts and figures which are fed into the computer is known as _____ data.

- i. Output ii. Process iii. Raw iv. None of these

4. The name of first calculating device was _____.

- i. Napier's Bones ii. Punch card
iii. Difference Engine iv. None of these

5. Napier's Bones invented by _____.

- i. John Napier ii. Joseph Jacquard
iii. Charles Babbage iv. None of these

6. ABACUS was invented by _____ in 450 B.C.

- i. European ii. Egyptian iii. African iv. American

7. Joseph Jacquard a french scientist invented a very useful device known as _____.

- i. Analytical Machine ii. Difference Engine
iii. Napier's Bones iv. Punch card

8. Who developed Analytical Machine?

- i. Joseph Jacquard ii. John Napier
iii. Charles Babbage iv. None of these

9. Who is known as the father of computer?

- i. John Napier ii. Charles Babbage
iii. Joseph Jacquard iv. None of these

10. The early man used _____ for counting and calculation.

- i. Stone ii. Fingers iii. Both (i)&(ii) iv. None of these